


Triangles

Name: _____

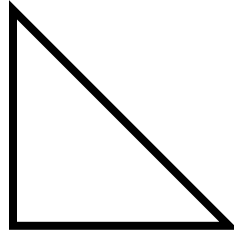
Label these triangles

E for equilateral, S for scalene, I for isosceles, and R for right triangle

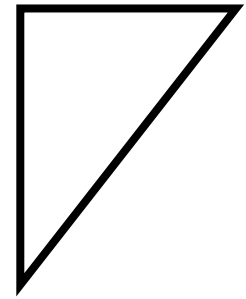
1 _____




2 _____



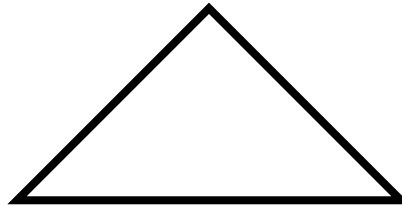
3 _____




4 _____



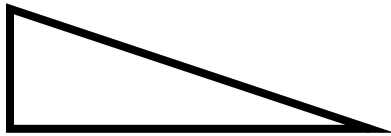
5 _____



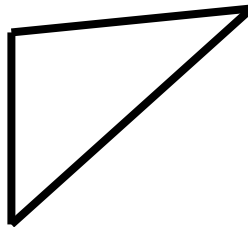
6 _____




7 _____



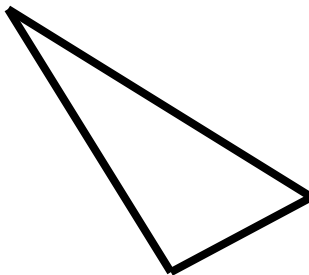
8 _____



9 _____



10 _____



11 _____



12 _____

