




Name: _____



$$5 - 3 = \underline{\hspace{2cm}}$$



$$2 - 2 = \underline{\hspace{2cm}}$$



$$4 - 2 = \underline{\hspace{2cm}}$$



$$7 - 5 = \underline{\hspace{2cm}}$$