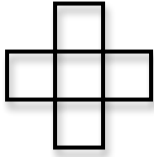




The Problem:



1.



2.



3.

Elisabeth made this pattern with blocks. How many blocks will she need for the 10<sup>th</sup> level of this pattern?

What do we want to know?

What is the important information?

How should we go about solving this problem?

**Strategy  
Toolbox:**

- Add
- Subtract
- Multiply
- Divide
- Make a picture
- Make a table
- Make a model
- Make the problem smaller
- Guess and check
- Work backwards

Workspace (attach other pages if needed)

What is your solution?

Does this solution make sense?

**Reflection on this problem:**

Did you complete all the sections of the worksheet?

---

Is your work clearly presented so that others may understand how you solved this problem?

---

Describe your solution:

---

---

---

---

---

---

---

---

---

---

---